


Early Elementary Theory Test

2006

1. Name the notes.



2. Write counting under every note.



Add bar lines to this rhythm. Remember the kind of bar line that goes at the end.



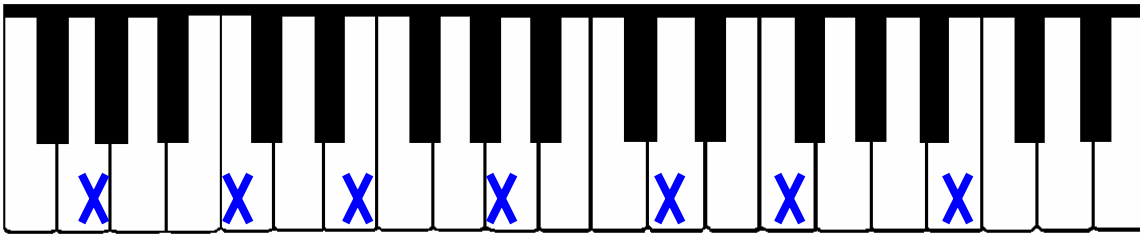
3. Write the music alphabet *forward* starting with F.

F _____

Write the music alphabet *backward* starting with C.


C _____

4. Name each key that has an X on it.



— — — — — — — —

5. Answer the questions about this musical example.



What is the interval in measure 1? (Circle one answer.)
 a. 2nd b. 3rd c. 4th d. 5th

What is the interval in measure 2? a. 2nd b. 3rd c. 4th d. 5th

What is the interval in measure 3? a. 2nd b. 3rd c. 4th d. 5th

How loudly should the piece be played? (Circle one answer.)

a. soft b. medium soft c. medium loud d. loud

What should the time signature be? (Circle one answer.)

a. 2/4 b. 3/4 c. 4/4